



Mr. Northcutt's Math Classes Class Presentation


May 29, 2009 (169)



Math 1



Math 2



Applied Math



Math 1 – Daily Summary

- **Announcements**
 - **PROFICIENCY TEST: Monday, June 1**
 - **MATH 1 FINAL: Thursday, June 4**
 - **Extra Credit/Review Posted on Website (and I have hardcopy)**
- **Class Objectives – What you should learn today?**
 - Algebra Review - Cumulative Review
- **Assignment**
 - **Worksheet: Cumulative Review**



Math 2 – Daily Summary

- **Announcements**
 - **PROFICIENCY TEST: Monday, June 1**
 - **MATH 2 FINAL: Thursday, June 4**
 - **Extra Credit/Review Posted on Website (and I have hardcopy)**
- **Class Objectives – What you should learn today?**
 - Algebra Review - Cumulative Review
- **Assignment**
 - **Worksheet: Cumulative Review**

SAT Geometry Challenge Problem



- Find the AREA of $\triangle PQR$ with P (4.5,4.5), Q (8.5,8.5), and R (6,0).



Applied Math – Daily Summary

- **Announcements**
 - None
- **Class Objectives – What you should learn today?**
 - TED Previews
- **Assignment**
 - NO HW